



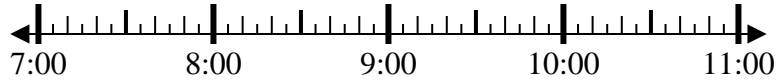
Solve each problem.

Answers

1) Start: 7:35

Elapsed: 1 hr & 25 mins

End: _____



1. _____

2) Start: 5:40

Elapsed: 1 hr & 10 mins

End: _____

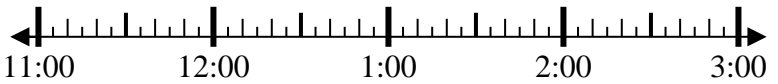


2. _____

3) Start: 11:50

Elapsed: 2 hrs & 35 mins

End: _____



3. _____

4) Start: 7:45

Elapsed: 2 hrs & 30 mins

End: _____



4. _____

5) Start: 11:45

Elapsed: 2 hrs & 40 mins

End: _____

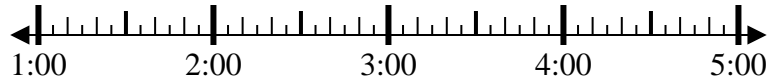


5. _____

6) Start: 1:55

Elapsed: 1 hr & 35 mins

End: _____



6. _____

7) Start: 10:05

Elapsed: 2 hrs & 55 mins

End: _____



7. _____

8) Start: 8:20

Elapsed: 1 hr & 40 mins

End: _____



8. _____



Solve each problem.

1) Start: 7:35

Elapsed: 1 hr & 25 mins

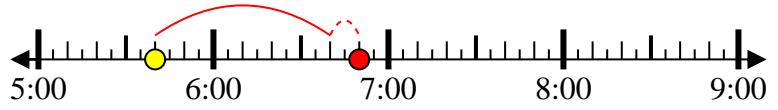
End: 9:00



2) Start: 5:40

Elapsed: 1 hr & 10 mins

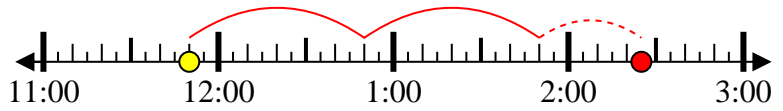
End: 6:50



3) Start: 11:50

Elapsed: 2 hrs & 35 mins

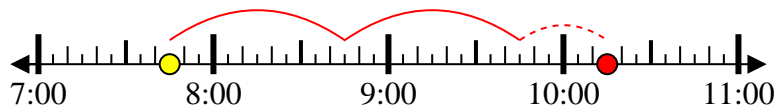
End: 2:25



4) Start: 7:45

Elapsed: 2 hrs & 30 mins

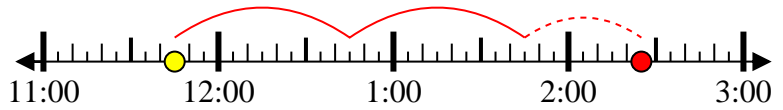
End: 10:15



5) Start: 11:45

Elapsed: 2 hrs & 40 mins

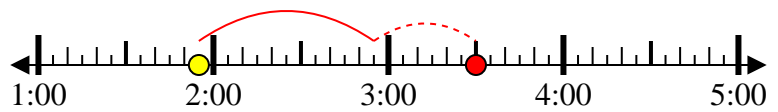
End: 2:25



6) Start: 1:55

Elapsed: 1 hr & 35 mins

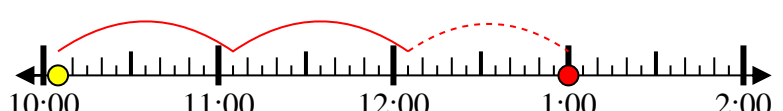
End: 3:30



7) Start: 10:05

Elapsed: 2 hrs & 55 mins

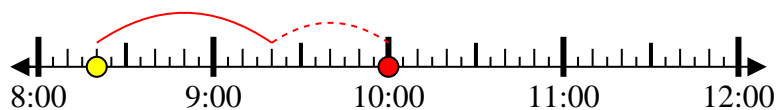
End: 1:00



8) Start: 8:20

Elapsed: 1 hr & 40 mins

End: 10:00



Answers

1. 9:00

2. 6:50

3. 2:25

4. 10:15

5. 2:25

6. 3:30

7. 1:00

8. 10:00